



# The SAT<sup>®</sup>

# Practice Test #7

**Make time to take the practice test.**

It is one of the best ways to get ready for the SAT.

After you have taken the practice test, score it right away at [sat.org/digital-practice](https://sat.org/digital-practice).

This version of the SAT Practice Test is for students who will be taking the digital SAT in nondigital format.



# Math

## 27 QUESTIONS

### DIRECTIONS

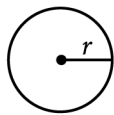
The questions in this section address a number of important math skills. Use of a calculator is permitted for all questions.

### NOTES

Unless otherwise indicated:

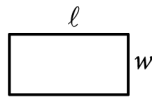
- All variables and expressions represent real numbers.
- Figures provided are drawn to scale.
- All figures lie in a plane.
- The domain of a given function  $f$  is the set of all real numbers  $x$  for which  $f(x)$  is a real number.

### REFERENCE

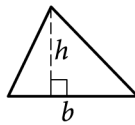


$$A = \pi r^2$$

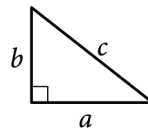
$$C = 2\pi r$$



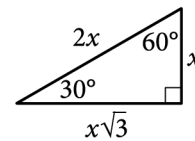
$$A = \ell w$$



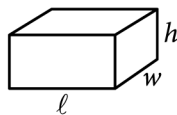
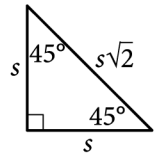
$$A = \frac{1}{2}bh$$



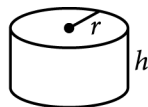
$$c^2 = a^2 + b^2$$



Special Right Triangles



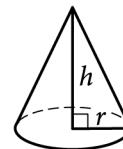
$$V = \ell wh$$



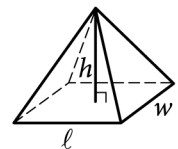
$$V = \pi r^2 h$$



$$V = \frac{4}{3}\pi r^3$$



$$V = \frac{1}{3}\pi r^2 h$$



$$V = \frac{1}{3}\ell wh$$

The number of degrees of arc in a circle is 360.

The number of radians of arc in a circle is  $2\pi$ .

The sum of the measures in degrees of the angles of a triangle is 180.

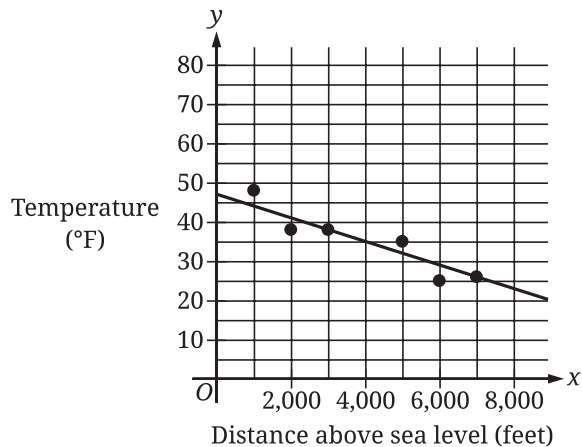
**For multiple-choice questions**, solve each problem, choose the correct answer from the choices provided, and then circle your answer in this book. Circle only one answer for each question. If you change your mind, completely erase the circle. You will not get credit for questions with more than one answer circled, or for questions with no answers circled.

**For student-produced response questions**, solve each problem and write your answer next to or under the question in the test book as described below.

- Once you've written your answer, circle it clearly. You will not receive credit for anything written outside the circle, or for any questions with more than one circled answer.
- If you find **more than one correct answer**, write and circle only one answer.
- Your answer can be up to 5 characters for a **positive** answer and up to 6 characters (including the negative sign) for a **negative** answer, but no more.
- If your answer is a **fraction** that is too long (over 5 characters for positive, 6 characters for negative), write the decimal equivalent.
- If your answer is a **decimal** that is too long (over 5 characters for positive, 6 characters for negative), truncate it or round at the fourth digit.
- If your answer is a **mixed number** (such as  $3\frac{1}{2}$ ), write it as an improper fraction ( $\frac{7}{2}$ ) or its decimal equivalent (3.5).
- Don't include **symbols** such as a percent sign, comma, or dollar sign in your circled answer.

1

The scatterplot shows the temperature, in degrees Fahrenheit ( $^{\circ}\text{F}$ ), and the distance above sea level, in feet, measured at 6 locations on Mount Jefferson. A line of best fit is also shown.



At a distance of 4,000 feet above sea level, what is the temperature, in  $^{\circ}\text{F}$ , predicted by the line of best fit?

- A) 47
- B) 35
- C) 25
- D) 0

2

Rectangle P has an area of 72 square inches. If a rectangle with an area of 20 square inches is removed from rectangle P, what is the area, in square inches, of the resulting figure?

- A) 92
- B) 84
- C) 80
- D) 52

3

$$|p| + 61 = 65$$

Which value is a solution to the given equation?

- A)  $\frac{65}{61}$
- B) 4
- C) 126
- D) 130

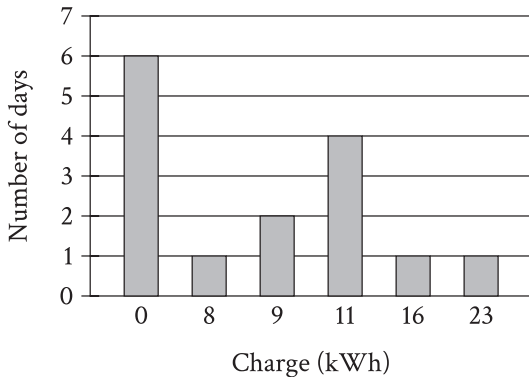
4

Lorenzo purchased a box of cereal and some strawberries at the grocery store. Lorenzo paid \$2 for the box of cereal and \$1.90 per pound for the strawberries. If Lorenzo paid a total of \$9.60 for the box of cereal and the strawberries, which of the following equations can be used to find  $p$ , the number of pounds of strawberries Lorenzo purchased? (Assume there is no sales tax.)

- A)  $1.90p + 2 = 9.60$
- B)  $1.90p - 2 = 9.60$
- C)  $1.90 + 2p = 9.60$
- D)  $1.90 - 2p = 9.60$

5

The bar graph summarizes the charge, in kilowatt-hours (kWh), a battery received each day for 15 days.



For how many of these 15 days did the battery receive a charge of 0 kWh?

- A) 0
- B) 1
- C) 4
- D) 6

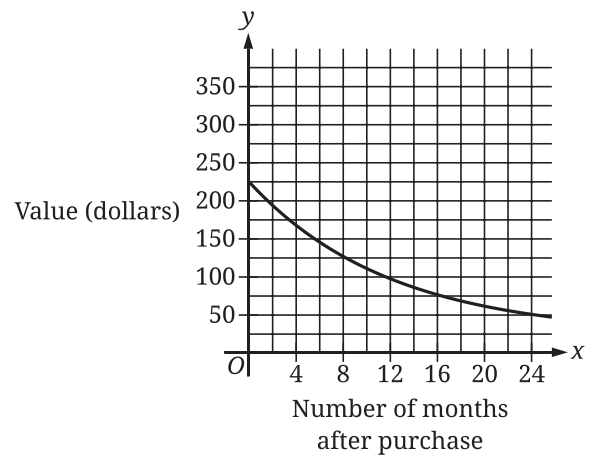
6

A line in the  $xy$ -plane has a slope of 9 and passes through the point  $(0, -5)$ . The equation  $y = px + r$  defines the line, where  $p$  and  $r$  are constants. What is the value of  $p$ ?

7

What is an  $x$ -coordinate of an  $x$ -intercept of the graph of  $y = 3(x - 14)(x + 5)(x + 4)$  in the  $xy$ -plane?

8



The graph shown gives the estimated value, in dollars, of a tablet as a function of the number of months since it was purchased. What is the best interpretation of the  $y$ -intercept of the graph in this context?

- A) The estimated value of the tablet was \$225 when it was purchased.
- B) The estimated value of the tablet 24 months after it was purchased was \$225.
- C) The estimated value of the tablet had decreased by \$225 in the 24 months after it was purchased.
- D) The estimated value of the tablet decreased by approximately 2.25% each year after it was purchased.

9

Triangles  $EFG$  and  $JKL$  are congruent, where  $E$ ,  $F$ , and  $G$  correspond to  $J$ ,  $K$ , and  $L$ , respectively. The measure of angle  $E$  is  $45^\circ$  and the measure of angle  $F$  is  $20^\circ$ . What is the measure of angle  $J$ ?

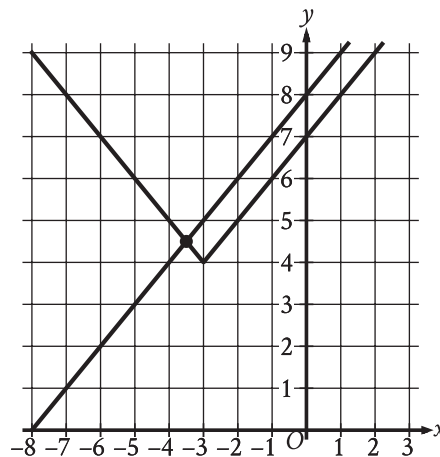
- A)  $20^\circ$
- B)  $45^\circ$
- C)  $135^\circ$
- D)  $160^\circ$

10

The function  $f$  is defined by  $f(x) = \frac{1}{2}(x + 6)$ . What is the value of  $f(4)$ ?

- A) 20
- B) 12
- C) 10
- D) 5

11



The graph of a system of an absolute value function and a linear function is shown. What is the solution  $(x, y)$  to this system of two equations?

- A)  $(0, 8)$
- B)  $\left(\frac{7}{2}, \frac{9}{2}\right)$
- C)  $\left(-\frac{7}{2}, \frac{9}{2}\right)$
- D)  $(-3, 4)$

12

$$y = 6x + 3$$

One of the two equations in a system of linear equations is given. The system has infinitely many solutions. Which equation could be the second equation in this system?

- A)  $y = 2(6x) + 3$
- B)  $y = 2(6x + 3)$
- C)  $2(y) = 2(6x) + 3$
- D)  $2(y) = 2(6x + 3)$

13

If  $\frac{6}{7}p + 18 = 54$ , what is the value of  $7p$ ?

14

$$\begin{aligned} y &= 9x + 12 \\ x + 7y &= 20 \end{aligned}$$

The solution to the given system of equations is  $(x, y)$ . What is the value of  $y$ ?

15

A circle in the  $xy$ -plane has the equation  $(x - 13)^2 + (y - k)^2 = 64$ . Which of the following gives the center of the circle and its radius?

- A) The center is at  $(13, k)$  and the radius is 8.
- B) The center is at  $(k, 13)$  and the radius is 8.
- C) The center is at  $(k, 13)$  and the radius is 64.
- D) The center is at  $(13, k)$  and the radius is 64.

16

The function  $f$  is defined by  $f(x) = |x - 4x|$ . What value of  $a$  satisfies  $f(5) - f(a) = -15$ ?

- A)  $-20$
- B)  $5$
- C)  $10$
- D)  $45$

17

For the exponential function  $f$ , the value of  $f(0)$  is  $c$ , where  $c$  is a constant. Of the following equations that define the function  $f$ , which equation shows the value of  $c$  as the coefficient or the base?

- A)  $f(x) = 22(1.5)^{x+1}$
- B)  $f(x) = 33(1.5)^x$
- C)  $f(x) = 49.5(1.5)^{x-1}$
- D)  $f(x) = 74.25(1.5)^{x-2}$

18

The function  $f(t) = 40,000(2)^{\frac{t}{790}}$  gives the number of bacteria in a population  $t$  minutes after an initial observation. How much time, in minutes, does it take for the number of bacteria in the population to double?

- A) 2
- B) 790
- C) 1,580
- D) 40,000

19

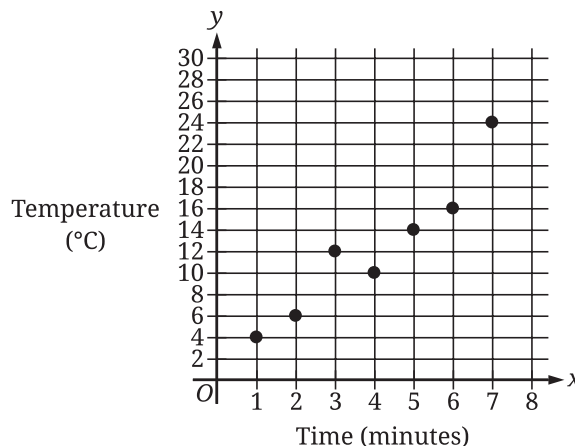
$$\frac{12}{n} - \frac{2}{t} = -\frac{2}{w}$$

The given equation relates the variables  $n$ ,  $t$ , and  $w$ , where  $n > 0$ ,  $t > 0$ , and  $w > t$ . Which expression is equivalent to  $n$ ?

- A)  $12tw$
- B)  $6(t - w)$
- C)  $\frac{w - t}{6tw}$
- D)  $\frac{6tw}{w - t}$

20

During a study, the temperature, in degrees Celsius ( $^{\circ}\text{C}$ ), of the air in a chamber was recorded to the nearest integer at certain times. The scatterplot shows the recorded temperature  $y$ , in  $^{\circ}\text{C}$ , of the air in the chamber  $x$  minutes after the start of the study.



What was the average rate of change, in  $^{\circ}\text{C}$  per minute, of the recorded temperature of the air in the chamber from  $x = 5$  to  $x = 7$ ?

21

In August, a car dealer completed 15 more than 3 times the number of sales the car dealer completed in September. In August and September, the car dealer completed 363 sales. How many sales did the car dealer complete in September?

22

Points  $Q$  and  $R$  lie on a circle with center  $P$ . The radius of this circle is 9 inches. Triangle  $PQR$  has a perimeter of 31 inches. What is the length, in inches, of  $\overline{QR}$ ?

- A)  $13\sqrt{2}$
- B) 13
- C)  $9\sqrt{2}$
- D) 9

23

In a set of four consecutive odd integers, where the integers are ordered from least to greatest, the first integer is represented by  $x$ . The product of 12 and the fourth odd integer is at most 26 less than the sum of the first and third odd integers. Which inequality represents this situation?

- A)  $12(x + 6) \leq x + (x + 4) - 26$
- B)  $12(x + 6) \geq 26 - (x + (x + 4))$
- C)  $12(x + 4) \leq x + (x + 3) - 26$
- D)  $12(x + 4) \geq 26 - (x + (x + 3))$

24

$x$	$y$
$-2s$	24
$-s$	21
$s$	15

The table shows three values of  $x$  and their corresponding values of  $y$ , where  $s$  is a constant. There is a linear relationship between  $x$  and  $y$ . Which of the following equations represents this relationship?

- A)  $sx + 3y = 18s$
- B)  $3x + sy = 18s$
- C)  $3x + sy = 18$
- D)  $sx + 3y = 18$

25

Which of the following expressions is equivalent to  $(\sin 24^\circ)(\cos 66^\circ) + (\cos 24^\circ)(\sin 66^\circ)$ ?

- A)  $2(\cos 66^\circ)(\sin 24^\circ)$
- B)  $2(\cos 66^\circ) + 2(\cos 24^\circ)$
- C)  $(\cos 66^\circ)^2 + (\cos 24^\circ)^2$
- D)  $(\cos 66^\circ)^2 + (\sin 24^\circ)^2$

26

The cost of renting a carpet cleaner is \$52 for the first day and \$26 for each additional day. Which of the following functions gives the cost  $C(d)$ , in dollars, of renting the carpet cleaner for  $d$  days, where  $d$  is a positive integer?

- A)  $C(d) = 26d + 26$
- B)  $C(d) = 26d + 52$
- C)  $C(d) = 52d - 26$
- D)  $C(d) = 52d + 78$

27

$$f(x) = (x - 2)(x + 15)$$

The function  $f$  is defined by the given equation. For what value of  $x$  does  $f(x)$  reach its minimum?

**STOP**

**If you finish before time is called, you may check your work on this module only.  
Do not turn to any other module in the test.**

**No Test Material On This Page**

# Math

## 27 QUESTIONS

### DIRECTIONS

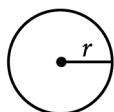
The questions in this section address a number of important math skills. Use of a calculator is permitted for all questions.

### NOTES

Unless otherwise indicated:

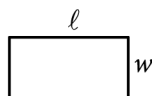
- All variables and expressions represent real numbers.
- Figures provided are drawn to scale.
- All figures lie in a plane.
- The domain of a given function  $f$  is the set of all real numbers  $x$  for which  $f(x)$  is a real number.

### REFERENCE

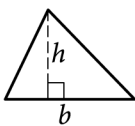


$$A = \pi r^2$$

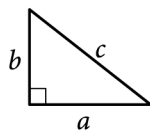
$$C = 2\pi r$$



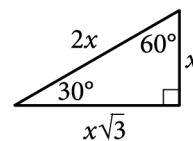
$$A = \ell w$$



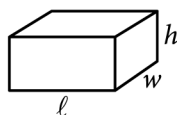
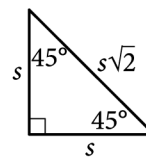
$$A = \frac{1}{2}bh$$



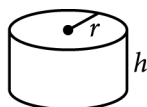
$$c^2 = a^2 + b^2$$



Special Right Triangles



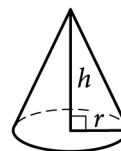
$$V = \ell wh$$



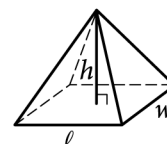
$$V = \pi r^2 h$$



$$V = \frac{4}{3}\pi r^3$$



$$V = \frac{1}{3}\pi r^2 h$$



$$V = \frac{1}{3}\ell wh$$

The number of degrees of arc in a circle is 360.

The number of radians of arc in a circle is  $2\pi$ .

The sum of the measures in degrees of the angles of a triangle is 180.

**For multiple-choice questions**, solve each problem, choose the correct answer from the choices provided, and then circle your answer in this book. Circle only one answer for each question. If you change your mind, completely erase the circle. You will not get credit for questions with more than one answer circled, or for questions with no answers circled.

**For student-produced response questions**, solve each problem and write your answer next to or under the question in the test book as described below.

- Once you've written your answer, circle it clearly. You will not receive credit for anything written outside the circle, or for any questions with more than one circled answer.
- If you find **more than one correct answer**, write and circle only one answer.
- Your answer can be up to 5 characters for a **positive** answer and up to 6 characters (including the negative sign) for a **negative** answer, but no more.
- If your answer is a **fraction** that is too long (over 5 characters for positive, 6 characters for negative), write the decimal equivalent.
- If your answer is a **decimal** that is too long (over 5 characters for positive, 6 characters for negative), truncate it or round at the fourth digit.
- If your answer is a **mixed number** (such as  $3\frac{1}{2}$ ), write it as an improper fraction ( $\frac{7}{2}$ ) or its decimal equivalent (3.5).
- Don't include **symbols** such as a percent sign, comma, or dollar sign in your circled answer.

1

A total of 165 people contributed to a charity event as either a donor or a volunteer. 130 people contributed as a donor. How many people contributed as a volunteer?

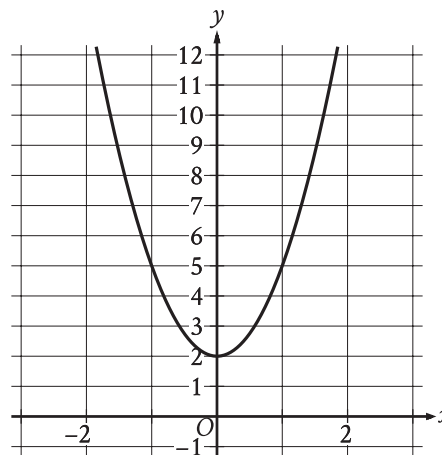
- A) 35
- B) 130
- C) 165
- D) 330

2

There are 250 trees in a park. Of these trees, 6% are birch trees. How many birch trees are in the park?

- A) 6
- B) 15
- C) 75
- D) 244

3



The graph of the quadratic function  $y = f(x)$  is shown. What is the vertex of the graph?

- A)  $(0, -2)$
- B)  $(0, -3)$
- C)  $(0, 2)$
- D)  $(0, 3)$

4

The number of raccoons in a 131-square-mile area is estimated to be 2,358. What is the estimated population density, in raccoons per square mile, of this area?

- A) 18
- B) 131
- C) 149
- D) 2,376

5

 $-11, -9, 26$ 

A data set of three numbers is shown. If a number from this data set is selected at random, what is the probability of selecting a positive number?

- A) 0
- B)  $\frac{1}{3}$
- C)  $\frac{2}{3}$
- D) 1

6

$$f(x) = 45x + 600$$

The function  $f$  gives the monthly fee  $f(x)$ , in dollars, a facility charges to keep  $x$  crates in storage. What is the monthly fee, in dollars, the facility charges to keep 50 crates in storage?

7

The function  $f$  is defined by  $f(x) = 5\left(\frac{1}{4} - x\right)^2 + \frac{11}{4}$ .

What is the value of  $f\left(\frac{1}{4}\right)$ ?

8

If  $8x = 6$ , what is the value of  $72x$ ?

- A) 3
- B) 15
- C) 54
- D) 57

9

Which expression is equivalent to  $23x^3 + 2x^2 + 9x$ ?

- A)  $23x(x^2 + 2x + 9)$
- B)  $9x(23x^3 + 2x^2 + 1)$
- C)  $x(23x^2 + 2x + 9)$
- D)  $34(x^3 + x^2 + x)$

10

Which expression is equivalent to  $(9x^3 + 5x + 7) + (6x^3 + 5x^2 - 5)$ ?

- A)  $15x^6 + 5x^2 - 5x - 35$
- B)  $15x^3 + 10x^2 + 2$
- C)  $15x^6 + 5x^2 + 5x + 2$
- D)  $15x^3 + 5x^2 + 5x + 2$

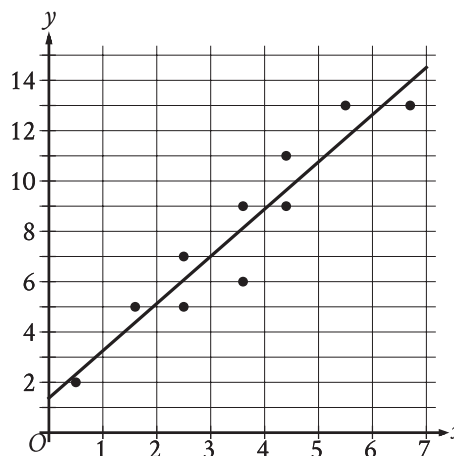
11

At a state fair, attendees can win tokens that are worth a different number of points depending on the shape. One attendee won  $S$  square tokens and  $C$  circle tokens worth a total of 1,120 points. The equation  $80S + 90C = 1,120$  represents this situation. How many more points is a circle token worth than a square token?

- A) 950
- B) 90
- C) 80
- D) 10

12

In the given scatterplot, a line of best fit for the data is shown.



Which of the following is closest to the slope of the line of best fit shown?

- A) 0
- B)  $\frac{1}{2}$
- C) 1
- D) 2

13

A circle has a radius of 2.1 inches. The area of the circle is  $b\pi$  square inches, where  $b$  is a constant. What is the value of  $b$  ?

14

In triangle  $XYZ$ , angle  $Y$  is a right angle, point  $P$  lies on  $\overline{XZ}$ , and point  $Q$  lies on  $\overline{YZ}$  such that  $\overline{PQ}$  is parallel to  $\overline{XY}$ . If the measure of angle  $XZY$  is  $63^\circ$ , what is the measure, in degrees, of angle  $XPQ$ ?

15

An investment account was opened with an initial value of \$890. The value of the account doubled every 10 years. Which equation represents the value of the account  $M(t)$ , in dollars,  $t$  years after the account was opened?

A)  $M(t) = 890\left(\frac{1}{2}\right)^{\frac{t}{10}}$

B)  $M(t) = 890\left(\frac{1}{10}\right)^{\frac{t}{2}}$

C)  $M(t) = 890(2)^{\frac{t}{10}}$

D)  $M(t) = 890(10)^{\frac{t}{2}}$

16

$$y < x$$

$$x < 22$$

For which of the following tables are all the values of  $x$  and their corresponding values of  $y$  solutions to the given system of inequalities?

A) 

$x$	$y$
19	18
20	19
21	20

B) 

$x$	$y$
19	20
20	21
21	22

C) 

$x$	$y$
23	22
24	23
25	24

D) 

$x$	$y$
23	24
24	25
25	26

17

Which expression is equivalent to  $\frac{h^{15}q^7}{h^5q^{21}}$ ,

where  $h > 0$  and  $q > 0$  ?

- A)  $\frac{h^{10}}{q^{14}}$   
 B)  $\frac{h^3}{q^3}$   
 C)  $h^{10}q^{14}$   
 D)  $h^3q^3$

18

$$\begin{aligned} 3y &= 4x + 17 \\ -3y &= 9x - 23 \end{aligned}$$

The solution to the given system of equations is  $(x, y)$ . What is the value of  $39x$  ?

- A) -18  
 B) -6  
 C) 6  
 D) 18

19

$$h(t) = -16t^2 + b$$

The function  $h$  estimates an object's height, in feet, above the ground  $t$  seconds after the object is dropped, where  $b$  is a constant. The function estimates that the object is 3,364 feet above the ground when it is dropped at  $t = 0$ . Approximately how many seconds after being dropped does the function estimate the object will hit the ground?

- A) 7.25  
 B) 14.50  
 C) 105.13  
 D) 210.25

20

$$2x^2 - 8x - 7 = 0$$

One solution to the given equation can be written as

$$\frac{8 - \sqrt{k}}{4},$$

where  $k$  is a constant. What is the value

of  $k$  ?

21

A line intersects two parallel lines, forming four acute angles and four obtuse angles. The measure of one of the acute angles is  $(9x - 560)^\circ$ . The sum of the measures of one of the acute angles and three of the obtuse angles is  $(-18x + w)^\circ$ . What is the value of  $w$  ?

22

$x$	$f(x)$
-4	0
$-\frac{19}{5}$	1
$-\frac{18}{5}$	2

For the linear function  $f$ , the table shows three values of  $x$  and their corresponding values of  $f(x)$ . If  $h(x) = f(x) - 13$ , which equation defines  $h$  ?

- A)  $h(x) = 5x - 4$
- B)  $h(x) = 5x + 7$
- C)  $h(x) = 5x + 9$
- D)  $h(x) = 5x + 20$

23

The linear function  $g$  is defined by  $g(x) = b - 15x$ , where  $b$  is a constant. If  $g(c + 7) = \frac{c}{4}$ , where  $c$  is a constant, which of the following expressions represents the value of  $b$  ?

- A)  $\frac{15c}{4}$
- B)  $\frac{19c}{4} + 7$
- C)  $\frac{61c}{4} + 105$
- D)  $15c + 105$

24

In triangle  $XYZ$ , angle  $Z$  is a right angle and the length of  $\overline{YZ}$  is 24 units. If  $\tan X = \frac{12}{35}$ , what is the perimeter, in units, of triangle  $XYZ$  ?

- A) 188
- B) 168
- C) 84
- D) 71

25

$$x^2 + 14x + y^2 = 6y + 109$$

In the  $xy$ -plane, the graph of the given equation is a circle. What is the length of the circle's radius?

- A)  $\sqrt{109}$
- B)  $\sqrt{149}$
- C)  $\sqrt{167}$
- D)  $\sqrt{341}$

26

The speed of a vehicle is increasing at a rate of 7.3 meters per second squared. What is this rate, in **miles per minute squared**, rounded to the nearest tenth? (Use 1 mile = 1,609 meters.)

- A) 0.3
- B) 16.3
- C) 195.8
- D) 220.4

27

$$y = -2.5$$
$$y = x^2 + 8x + k$$

In the given system of equations,  $k$  is a positive integer constant. The system has no real solutions. What is the least possible value of  $k$  ?

**STOP**

**If you finish before time is called, you may check your work on this module only.  
Do not turn to any other module in the test.**

# The SAT

---

## GENERAL DIRECTIONS

- You may work on only one module at a time.
- If you finish a module before time is called, check your work on that module only. You may NOT turn to any other module.

## TIMING

Reading and Writing, Module 1: 39 minutes

Reading and Writing, Module 2: 39 minutes

*10-minute break*

Math, Module 1: 43 minutes

Math, Module 2: 43 minutes

The above are standard times. If you are approved for accommodations involving additional time, you should give yourself that time when you practice.

## MARKING YOUR ANSWERS

- Be sure to answer your questions properly in this book.
- Circle only one answer to each question. If you change your mind, completely erase the circle. You will not get credit for questions with more than one answer circled, or for questions with no answers circled.

## USING YOUR TEST BOOK

- You may use the test book for scratch work.
- You may not fold or remove pages or portions of a page from this book, or take the book from the testing room.